



4A0-101^{Q&As}

Alcatel-Lucent Interior Routing Protocols and High Availability

Pass Alcatel-Lucent 4A0-101 Exam with 100% Guarantee

Free Download Real Questions & Answers **PDF** and **VCE** file from:

<https://www.geekcert.com/4a0-101.html>

100% Passing Guarantee
100% Money Back Assurance

Following Questions and Answers are all new published by Alcatel-Lucent Official Exam Center

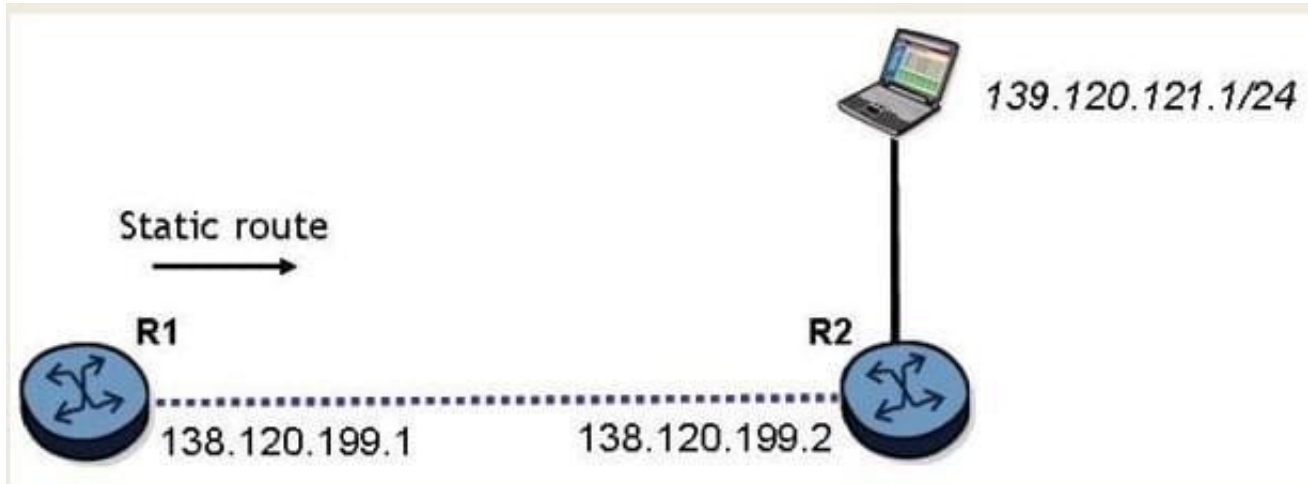
- ⚙️ **Instant Download** After Purchase
- ⚙️ **100% Money Back** Guarantee
- ⚙️ **365 Days** Free Update
- ⚙️ **800,000+** Satisfied Customers





QUESTION 1

Click the exhibit button.



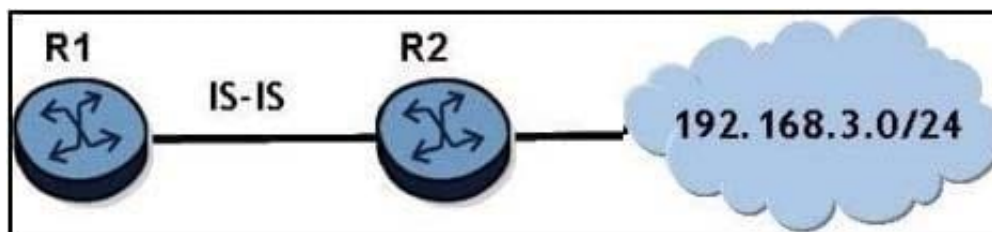
What is the command to configure a static route on the 7750 service router R1 to reach the network behind router R2?

- A. configure router static-route 139.120.121.0/24 next-hop 138.120.199.2
- B. configure router static-route 139.120.121.0/24 next-hop 138.120.199.1
- C. configure router static-route 138.120.199.2/24 next-hop 138.120.199.1
- D. configure router static-route 139.120.121.0/24 next-hop 139.120.121.2

Correct Answer: A

QUESTION 2

Click the exhibit button.



Router 2 advertises the network 192.168.3.0/24 to router R1 via IS-IS. How can router R1 ensure that it discards the route?

- A. Use a prefix list on router R1 to discard all ingress IS-IS routes.
- B. Use an export policy and prefix list on router R1.
- C. Use an import policy and a prefix list on router R1.



D. This is not possible because IS-IS cannot use import policies.

Correct Answer: D

QUESTION 3

Click on the exhibit.

```
*ISIS PKT:
•TX ISIS PDU ifid 3 len 59:
• Proto Disc : 131
• Header Len : 27
• Version PID : 1
• ID Length : 0
• Version : 1
• Reserved : 0
• Max Area Addr : 3
• PDU Type : (10) Level 2 LAN IS-IS Hello Pdu
• Circuit Type : L1L2
• Source Id : 01 00 10 01 00 04
• Hold Time : 27
• Packet length : 42
• Priority : 64
• LAN Id : 01 00 10 01 00 04 01
• Area Addresses:
• Area Address : (3) 49.0002
• Supp Protocols:
• Protocols : IPv4
• I/F Addresses :
• I/F Address : 10.3.4.2
```

```
*ISIS PKT:
•RX ISIS PDU ifid 3 len 43:
• Proto Disc : 131
• Header Len : 20
• Version PID : 1
• ID Length : 0
• Version : 1
• Reserved : 0
• Max Area Addr : 3
• PDU Type : (11) Point-2-Point IS-IS Hello Pdu
• Circuit Type : L1L2
• Source Id : 01 00 10 01 00 03
• Hold Time : 27
• Packet length : 42
• Circuit Id : 0
• Area Addresses:
• Area Address : (3) 49.0002
• Supp Protocols:
• Protocols : IPv4
• I/F Addresses :
• I/F Address : 10.3.4.1
• 3Way Adjacency :
• State : 
• Ext ckt ID : 1
```

What value would be expected in the state field?

A. Exchange

B. Up

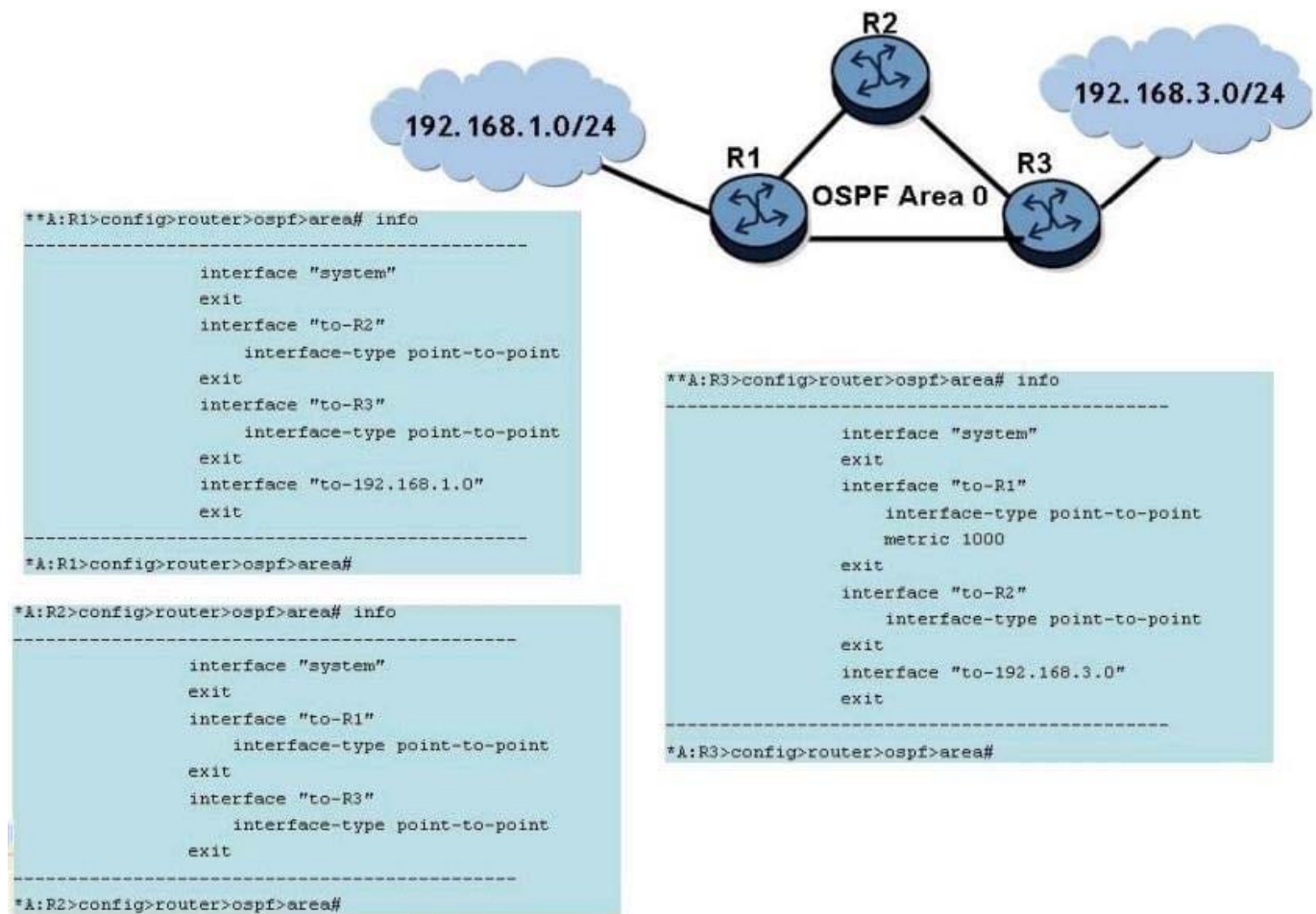
C. Down

D. 2-Way

Correct Answer: C

QUESTION 4

Click on the exhibit.



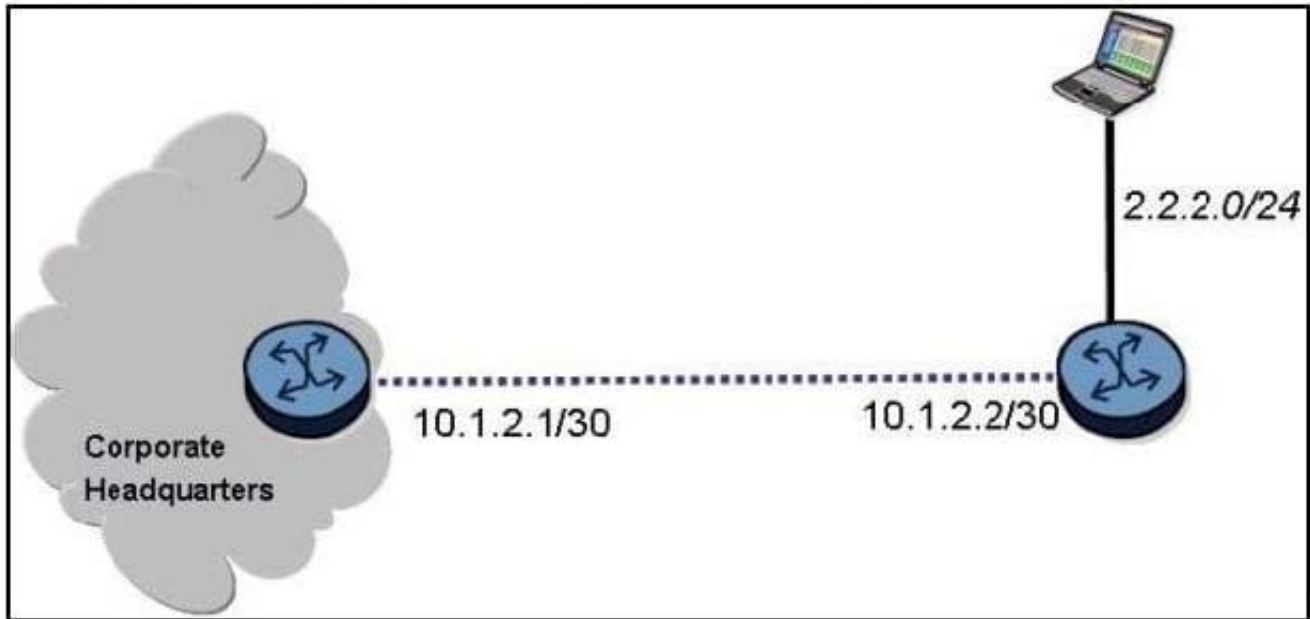
All ports in the network are operationally up and have a speed of 1Gbps. Which of the following is TRUE?

- A. Data traffic from network 192.168.1.0/24 to 192.168.3.0/24 will be forwarded through router R2.
- B. Data traffic from network 192.168.3.0/24 to 192.168.1.0/24 will be forwarded from router R3 directly to router R1.
- C. The system interface of routers R1 and R3 must be included into OSPF for traffic to flow between the 192.168.1.0/24 and 192.168.3.0/24 networks.
- D. The OSPF adjacency between router R1 and router R3 is operationally up.

Correct Answer: D

QUESTION 5

Click the exhibit button.



Given the diagram in the exhibit, what would be the correct static route configuration on the router on the right, if it is an Alcatel-Lucent 7750 SR?

- A. config> static-route 0.0.0.0/0 next-hop 10.1.2.2
- B. config>router> static-route 0.0.0.0 255.255.255.255 next-hop 10.1.2.1
- C. config>router> static-route 0.0.0.0/0 next-hop 10.1.2.2
- D. config>router> static-route 0 0.0 0/0 next-hop 10.1.2.1

Correct Answer: D

[Latest 4A0-101 Dumps](#)

[4A0-101 PDF Dumps](#)

[4A0-101 VCE Dumps](#)