



C2170-051^{Q&As}

IBM i2 Analyst's Notebook V8.9

Pass IBM C2170-051 Exam with 100% Guarantee

Free Download Real Questions & Answers **PDF** and **VCE** file from:

<https://www.geekcert.com/c2170-051.html>

100% Passing Guarantee
100% Money Back Assurance

Following Questions and Answers are all new published by IBM Official Exam Center

-  **Instant Download** After Purchase
-  **100% Money Back** Guarantee
-  **365 Days** Free Update
-  **800,000+** Satisfied Customers





QUESTION 1

Frames can be used to draw attention to key entities. Which of the following is NOT a reason to use frames in a chart?

- A. To distinguish groups of entities.
- B. To map entities to Google Earth.
- C. To indicate entities with shared attributes as a result of applying Conditional Formatting.
- D. To change the appearance of entities selected using analysis tools such as filtering or Social Network Analysis.

Correct Answer: B

QUESTION 2

A researcher in the UK has been tasked with creating a spreadsheet ready to be imported into Analyst's Notebook. The chart required looks like this:



Which of the following spreadsheets is ready for importing, and does not need any spreadsheet formulas or Column Actions to change it in any way?



A.

First Name	Frank	Zackary	Ayla
Middle Name		Mark Robert	Jane
Last Name	Wilson	Armstrong	Smith Armstrong
Date of Birth	08 Nov 60	13 Sep 79	24 Sep 82
Telephone Number	0456789102	0123456789	

B.

Name	Date of Birth	Telephone Number
Frank Wilson	08 Nov 60	0456789102
Zackary Mark Robert Armstrong	13 Sep 79	0123456789
Ayla Jane Smith Armstrong	24 Sep 82	

C.

First Name	Middle Name	Last Name	Date of Birth	Telephone Number
Frank		Wilson	08 Nov 60	0456789102
Zackary	Mark Robert	Armstrong	13 Sep 79	0123456789
Ayla	Jane	Smith Armstrong	24 Sep 82	

D.

Name	Frank Wilson	Zackary Mark Robert Armstrong	Ayla Jane Smith Armstrong
Date of Birth	08 Nov 60	13 Sep 79	24 Sep 82
Telephone Number	0456789102	0123456789	

A. Exhibit A

B. Exhibit B

C. Exhibit C

D. Exhibit D

Correct Answer: C

QUESTION 3

Which Entity Representation is shown here?



- A. Icon
- B. Male
- C. Picture
- D. Event Frame

Correct Answer: D

QUESTION 4

When importing data using Analyst's Notebook, the Import Specification requires the user to select an Import Design. Which of the following CANNOT be determined with the Import Design?

- A. The total number of entities and links imported from the data source.
- B. The structure of the links including the link types, labels and multiplicity.
- C. The entity types used to represent data. For example: telephone and account.
- D. The representations of the entities imported. For example: Icons, Theme Lines and Event Frames.

Correct Answer: A

QUESTION 5

Intelligence has arrived in a number of documents in the UK. A typical example is "Zackary Armstrong (Born 13 Sep 1979) lives at 84 Puddle Dock". An analyst has been tasked with creating a chart with all the relevant intelligence, so questions such as the following can be answered:

-

Who was born between 1 Jan 1978 and 31 Dec 1980?

Considering the entity for Zackary only, which of the following chart structures would be able to answer this question using a search?

A.

Exhibit A

B.



Exhibit B

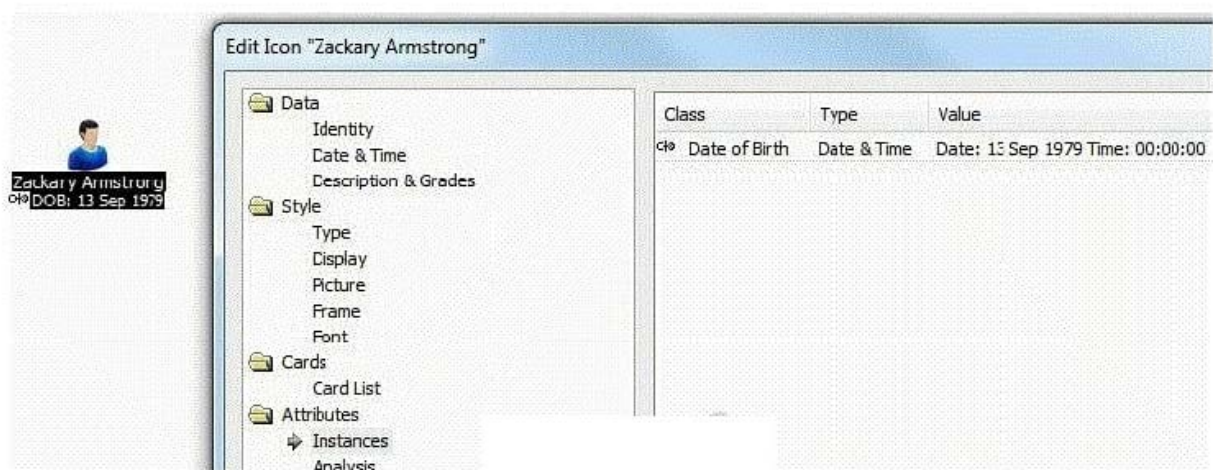
C.

Exhibit C

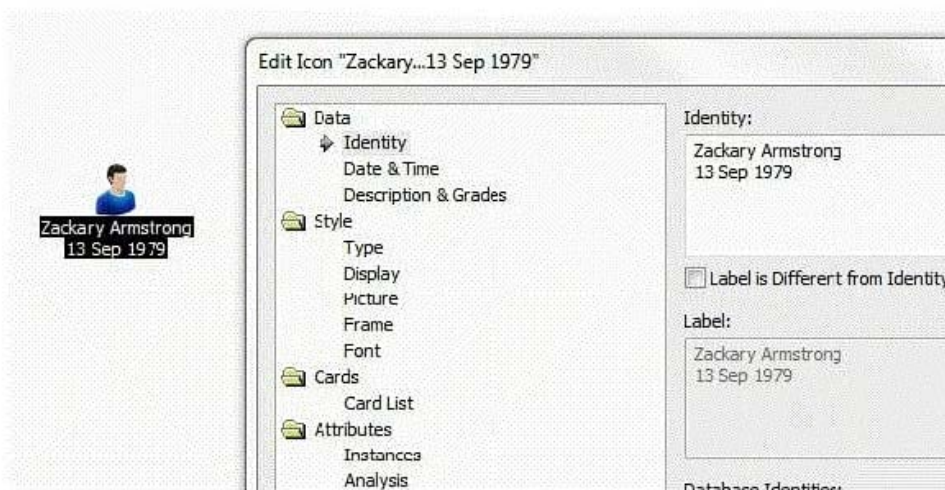
D.

Exhibit D

C. A.



C. B.

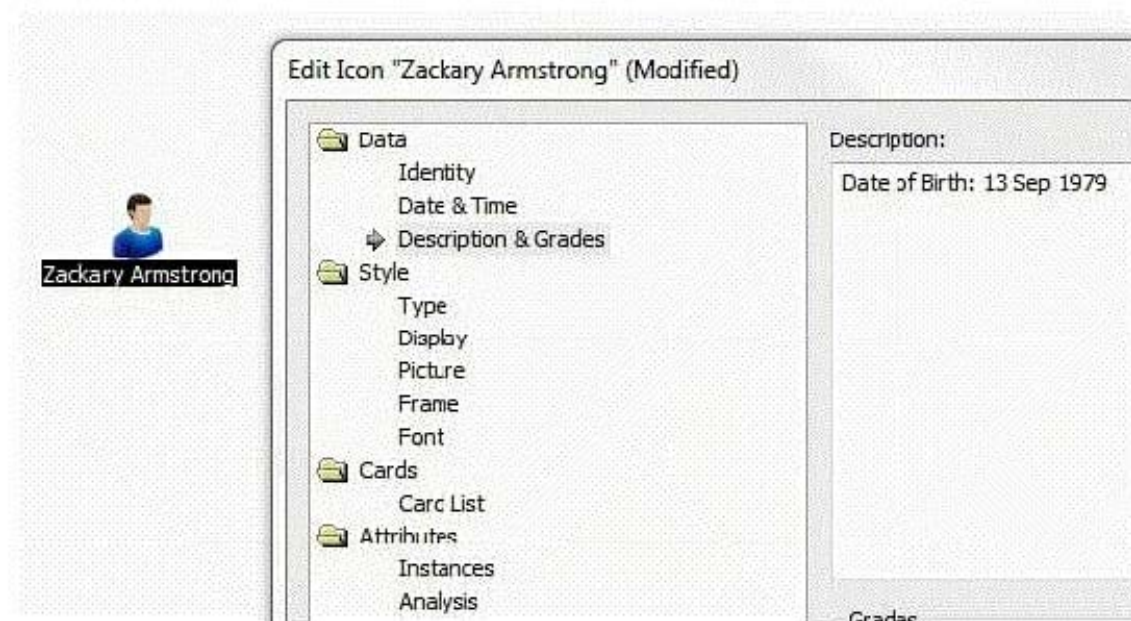




C. C.



C. D.



Correct Answer: A

[Latest C2170-051 Dumps](#)

[C2170-051 Exam Questions](#)

[C2170-051 Braindumps](#)