



CLAD^{Q&As}

Certified LabVIEW Associate Developer Examination

Pass NI CLAD Exam with 100% Guarantee

Free Download Real Questions & Answers **PDF** and **VCE** file from:

<https://www.geekcert.com/clad.html>

100% Passing Guarantee
100% Money Back Assurance

Following Questions and Answers are all new published by NI Official Exam Center

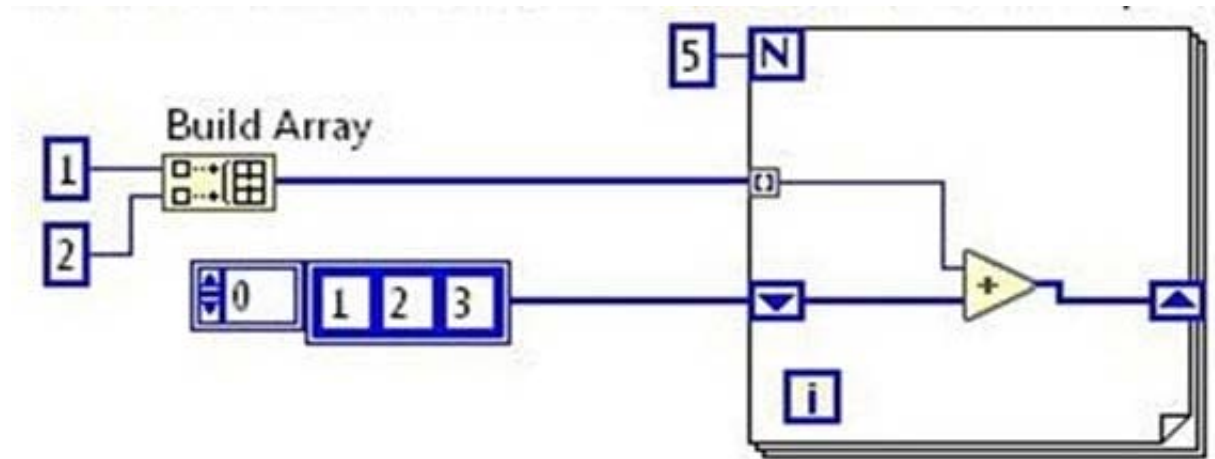
- ⚙️ **Instant Download** After Purchase
- ⚙️ **100% Money Back** Guarantee
- ⚙️ **365 Days** Free Update
- ⚙️ **800,000+** Satisfied Customers





QUESTION 1

You create an indicator from the shift register terminal on the right side of the loop. What will that indicator look like after the VI completes execution?



- ☐ A.
- ☐ B.
- ☐ C.
- ☐ D.

A. Option A

B. Option B

C. Option C

D. Option D

Correct Answer: A



QUESTION 2

If an input name on the Show Context Help window is in bold for a SubVI, which of the following conditions are true?
(Choose all apply)

- A. Input values must be scalar.
- B. An input is recommended, but not required.
- C. An input is required.
- D. A broken run arrow will result unless the input is wired.

Correct Answer: CD

QUESTION 3

Which Chart update mode should be used to draw new data from left to right, then clear the chart and draw new data again from left to right?

- A. Strip Chart
- B. Scope Chart
- C. Sweep Chart
- D. Step Chart

Correct Answer: B

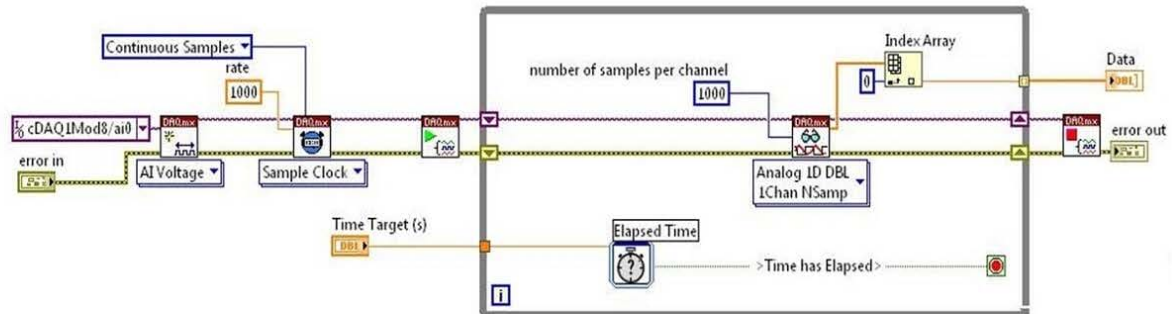
QUESTION 4

The Time Target (s) control is set for 10 seconds.

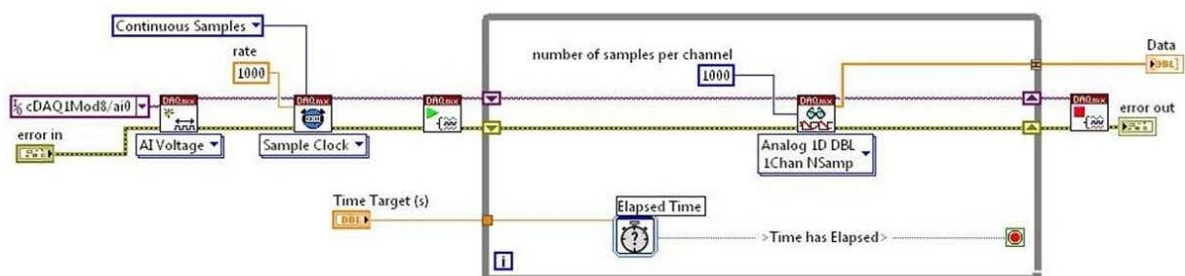
Which VI will collect all the data into a 1D array to be processed later?



Ⓐ.

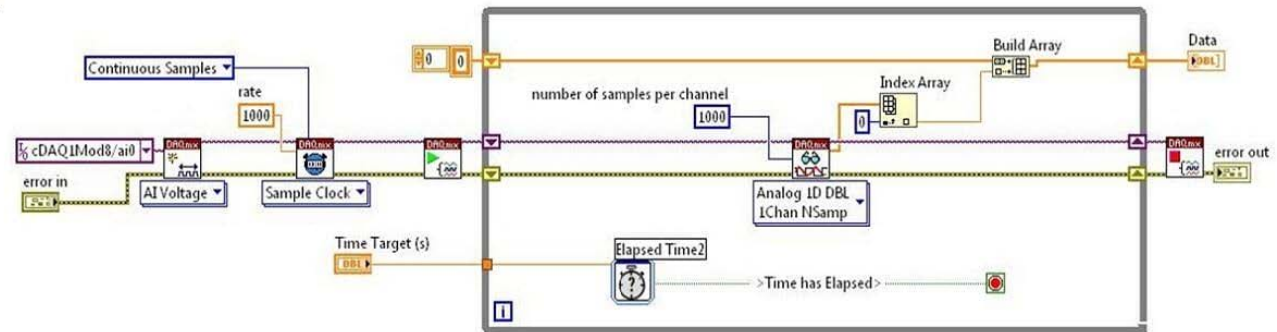


Ⓑ.

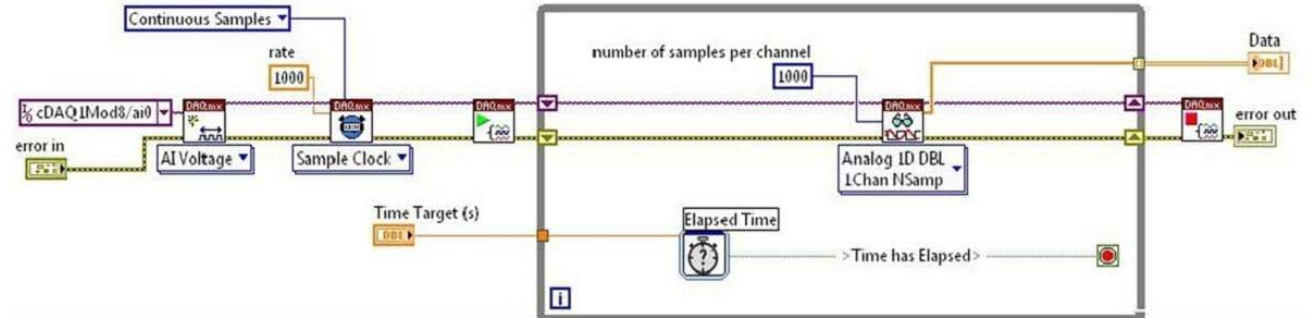




C.



D.



A. Option A

B. Option B

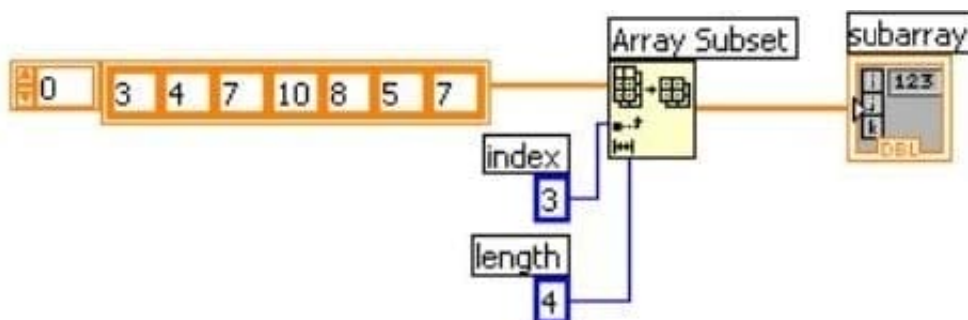
C. Option C

D. Option D

Correct Answer: C

QUESTION 5

What is the result in subarray after the following code has executed?



A. A 1-D Array of {8, 5, 7}

B. A 1-D Array of {10, 8, 5}

C. A 1-D Array of {10, 8, 5, 7}



D. A 1-D Array of {7, 10, 8, 5}

Correct Answer: C

[CLAD PDF Dumps](#)

[CLAD Practice Test](#)

[CLAD Braindumps](#)