



CLAD^{Q&As}

Certified LabVIEW Associate Developer Examination

Pass EC-COUNCIL CLAD Exam with 100% Guarantee

Free Download Real Questions & Answers **PDF** and **VCE** file from:

<https://www.geekcert.com/clad.html>

100% Passing Guarantee
100% Money Back Assurance

Following Questions and Answers are all new published by EC-COUNCIL Official Exam Center

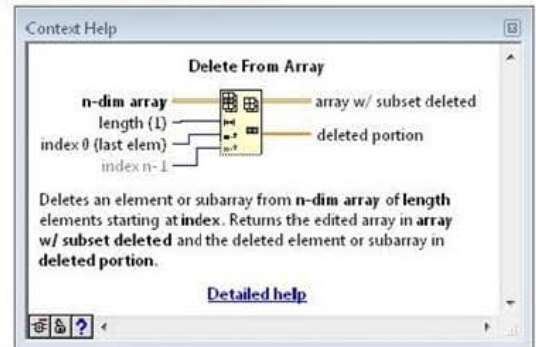
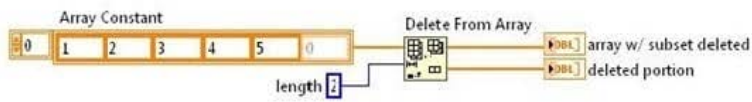
- ⚙️ **Instant Download** After Purchase
- ⚙️ **100% Money Back** Guarantee
- ⚙️ **365 Days** Free Update
- ⚙️ **800,000+** Satisfied Customers





QUESTION 1

What value will be displayed in the array w/ subset deleted and the deleted portion indicators after the VI completes execution?





☐ A.

array w/ subset deleted

0	4	5	0	0
---	---	---	---	---

deleted portion

0	1	2	3	0
---	---	---	---	---

☐ B.

array w/ subset deleted

0	1	2	0	0
---	---	---	---	---

deleted portion

0	3	4	5	0
---	---	---	---	---

☐ C.

array w/ subset deleted

0	3	4	5	0
---	---	---	---	---

deleted portion

0	1	2	0	0
---	---	---	---	---

☐ D.

array w/ subset deleted

0	1	2	3	0
---	---	---	---	---

deleted portion

0	4	5	0	0
---	---	---	---	---

A. Option A

B. Option B

C. Option C

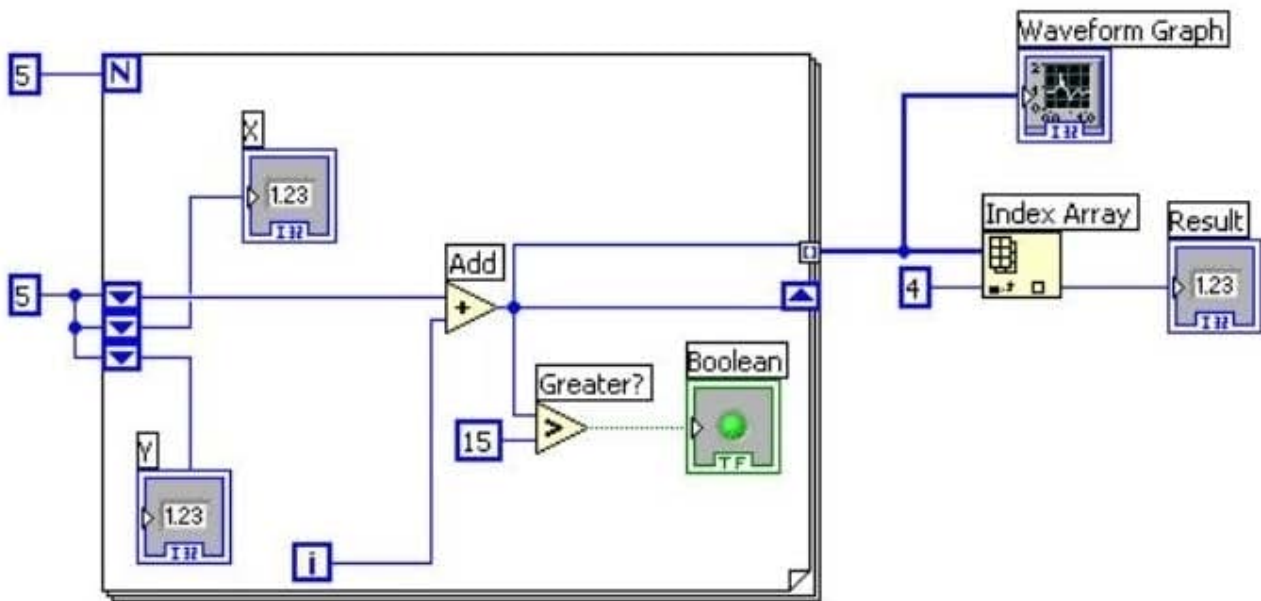
D. Option D

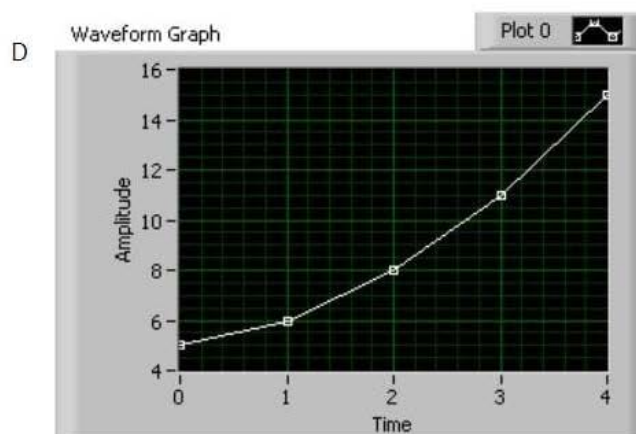
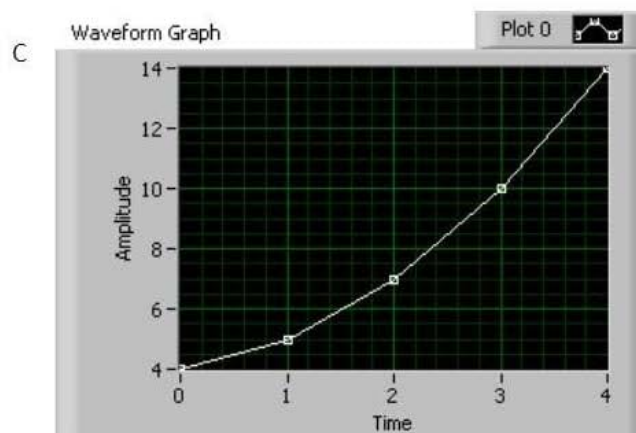
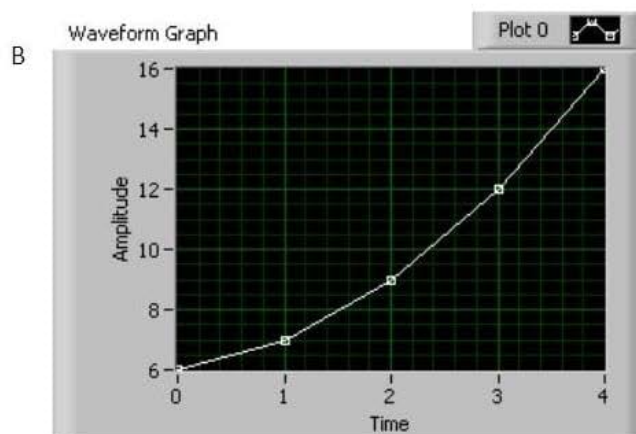
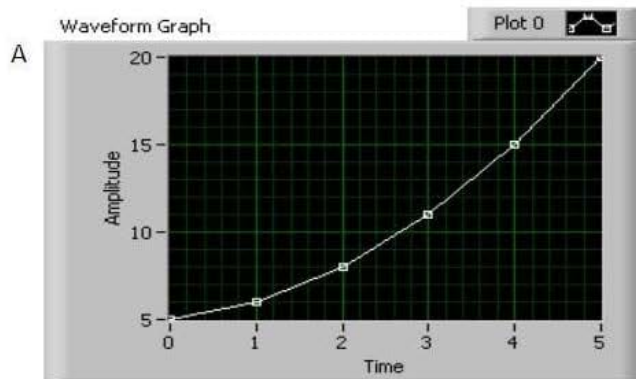
Correct Answer: D



QUESTION 2

Which of the graphs below matches the output in the Waveform Graph indicator after the following code has executed?







A. Option A

B. Option B

C. Option C

D. Option D

Correct Answer: D

QUESTION 3

Which of the following illustrates an advantage of a global variable over a local variable?

A. A global variable can pass data between two independent VIs running simultaneously

B. Only the global variable can pass array data, local variables cannot

C. Global variables follow the dataflow model, and therefore cannot cause race conditions

D. Global variables do not require owned labels to operate

Correct Answer: A

QUESTION 4

Which chart update mode plots new data from left to right, then clears the chart and plots the newer data?

A. Strip Chart

B. Scope Chart

C. Sweep Chart

D. Step Chart

Correct Answer: B

QUESTION 5

If an input name on the Show Context Help window is in bold for a SubVI, which of the following conditions are true? (Choose all apply)

A. Input values must be scalar.

B. An input is recommended, but not required.

C. An input is required.

D. A broken run arrow will result unless the input is wired.



Correct Answer: CD

[Latest CLAD Dumps](#)

[CLAD PDF Dumps](#)

[CLAD Exam Questions](#)